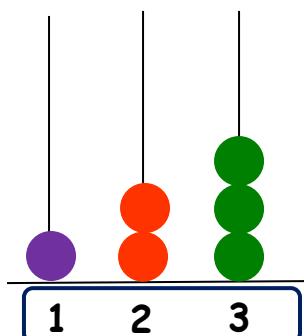


# MATHS ( GRADE 3 )

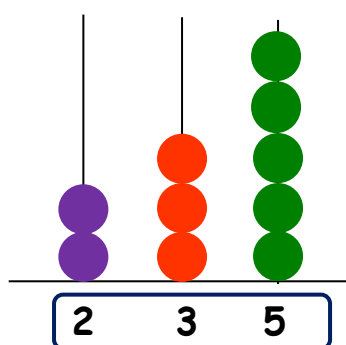
## Abacus / 3-digit numbers - **ANSWERS**

**Write the numeral shown on each abacus.** The first one has been done for you.



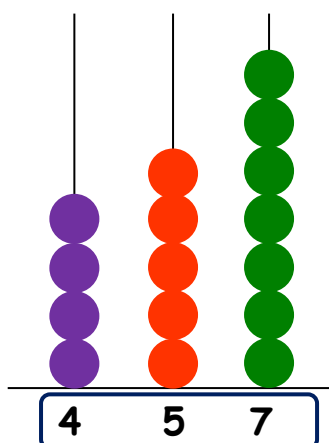
In figures : 1 2 3

In words : One hundred and twenty three



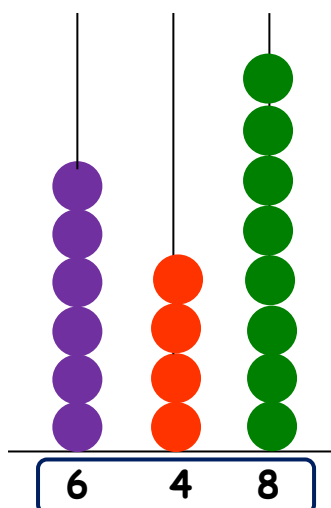
In figures : 2 3 5

In words : Two hundred and thirty five



In figures : 4 5 7

In words : Four hundred and fifty seven



In figures : 6 4 8

In words : Six hundred and forty eight